

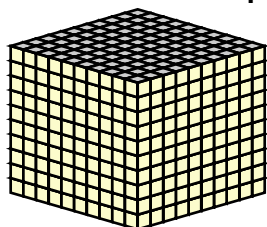
Name : _____

Score : _____

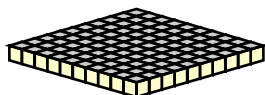
Teacher : _____

Date : _____

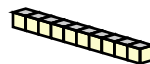
Find the value of each group of base ten blocks.




= 1000



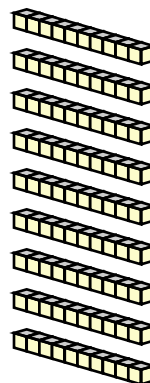
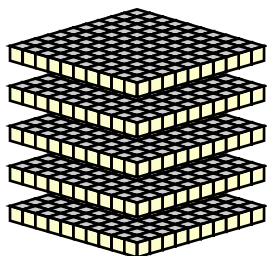
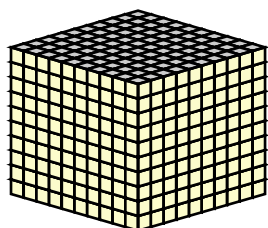
= 100



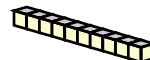
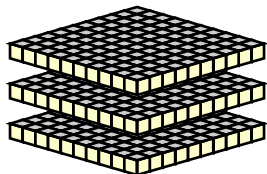
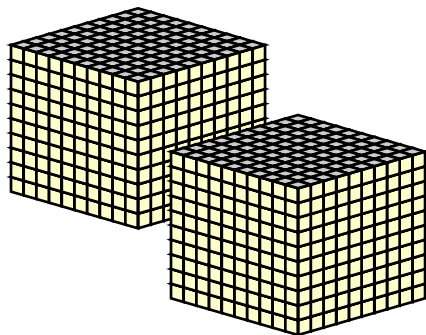
= 10

 = 1

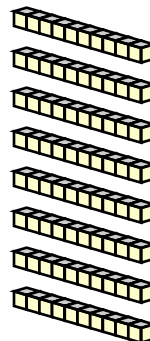

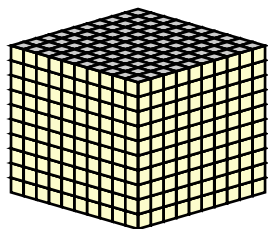
1)



2)



3)



Name : _____

Score : _____

Teacher : _____

Date : _____

Find the value of each group of base ten blocks.

1) 1598

2) 2315

3) 1982